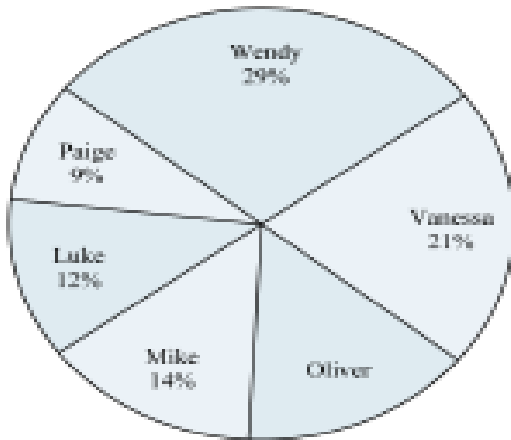


Math | Worksheet | Grade V Pie Chart

i)

Class Election Results

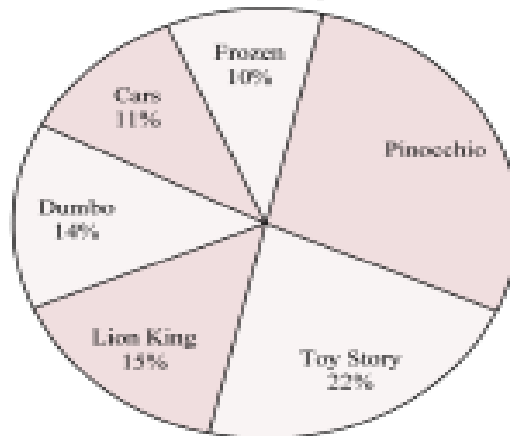


- 1) Who won the election?
- 2) Who got the least number of votes?
- 3) What percent of people voted for Oliver?
- 4) What percent of people voted for either Luke or Oliver?
- 5) Which two candidates had about half the votes?

ii)


- 6) Which movie was the most popular?
- 7) Which movie was the least popular?
- 8) What percent of people said Pinocchio was their favorite?
- 9) What percent of people said either Pinocchio or Cars was their favorite?
- 10) Which two movies did about half the people say was their favorite?

Favorite Disney Movie



iii)

A group of kids spent a week at Big Tree Summer Camp. At the end of the week, the counselors asked campers what their favorite part of camp was. The pie graph shows their responses.



1. What activity did campers enjoy the most?
2. What fraction of the campers chose canoeing as their favorite activity?
3. What fraction of the campers chose horseback riding as their favorite activity?
4. Did more campers choose camp fires or crafts as their favorite activity?
5. Was camp fire or canoeing more popular with the campers?