


Which shape am I?

I am a 2D shape.

I have 4 sides.

I have 4 corners

All of my sides are the same length.



I am a square.

Which shape am I?

I am a 3D shape.

I have 2 faces.

One of my faces is a circle.

I have one point.



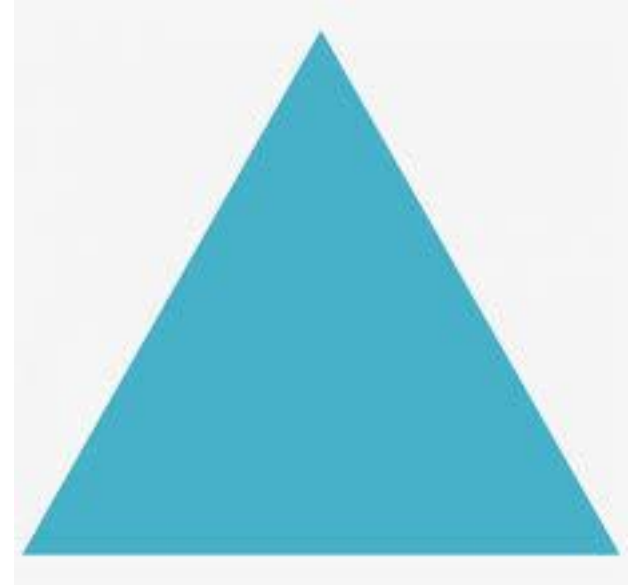
• I am a cone.

Which shape am I?

I am a 2D shape.

I have 3 sides.

I have 3 corners.



• I am a triangle.

Which shape am I?

I am a 2D shape.

I have 4 sides.

I have 4 corners.



2 of my sides are shorter, and 2 are longer.

• I am a rectangle.

Which shape am I?

I am a 3D shape.

I have 1 curved face.

I have no vertices.

I have no edges.



•I am a sphere.


Which shape am I?

I am a 3D shape.

I have 6 faces.

I have 8 vertices.

All of my faces are squares.



• I am a cube.

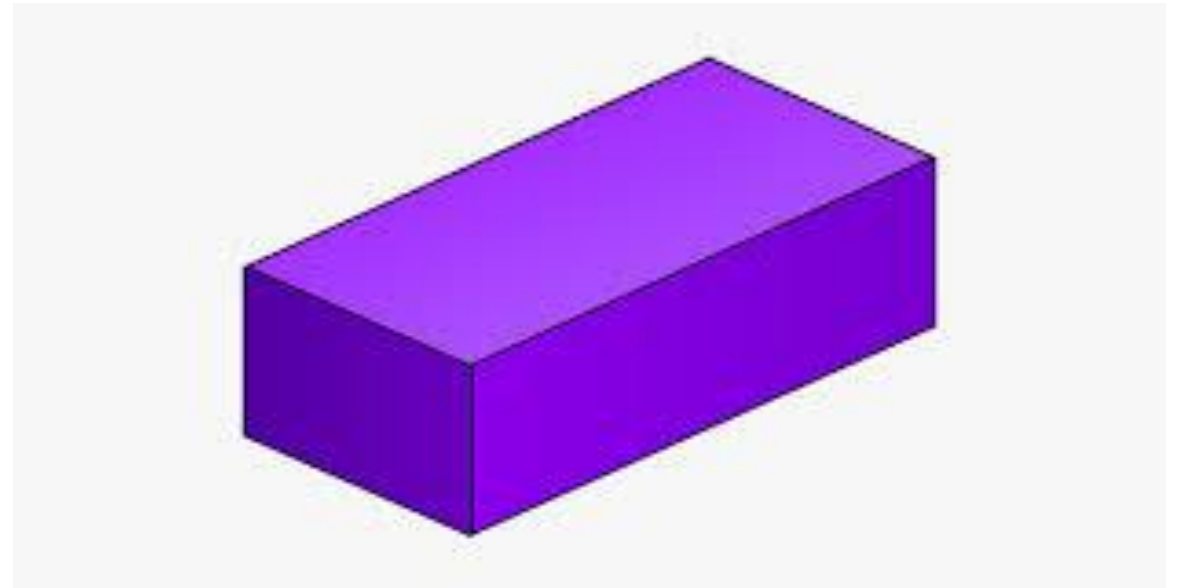
Which shape am I?

I am a 3D shape.

I have 6 faces.

I have 8 vertices.

I have 12 edges- not all the same length.



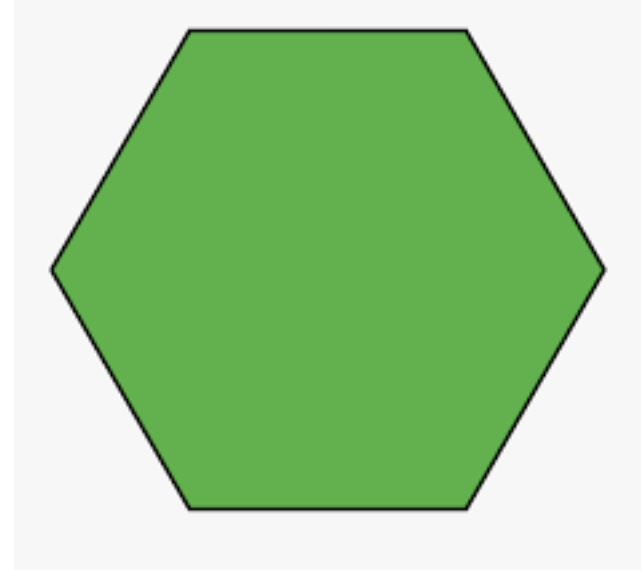
•I am a cuboid.

Which shape am I?

I am a 2D shape.

I have 6 sides.

I have 6 corners.




• I am a hexagon.

Which shape am I?

I am a 2D shape.

I have 1 curved side.

I have no corners.



•I am a circle.