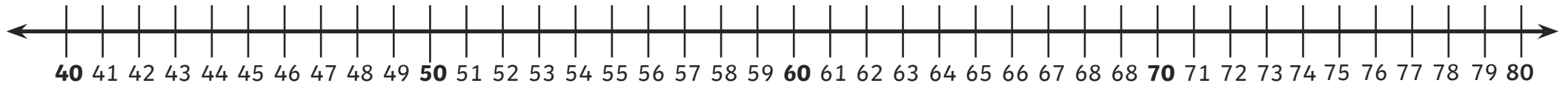


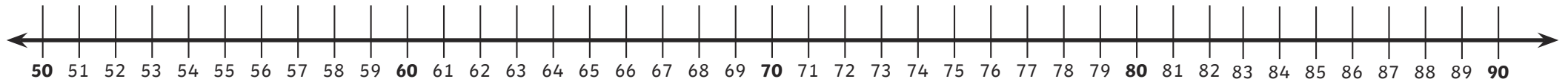
Jump Strategy Addition

Use the jump strategy to find the answer to each question.

$45 + 27 =$



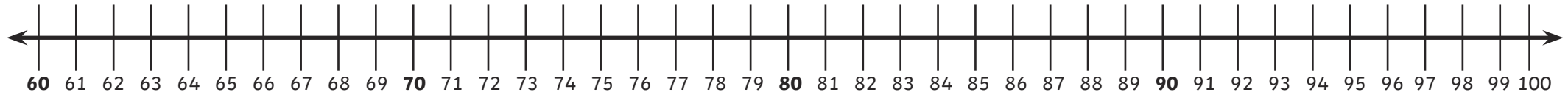
$52 + 31 =$



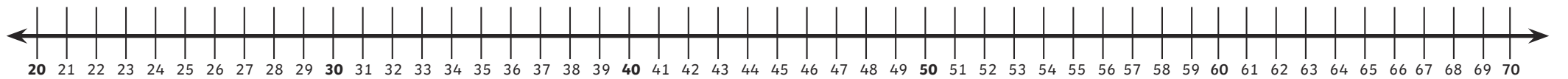
Jump Strategy Addition

Use the jump strategy to find the answer to each question.

$61 + 38 =$



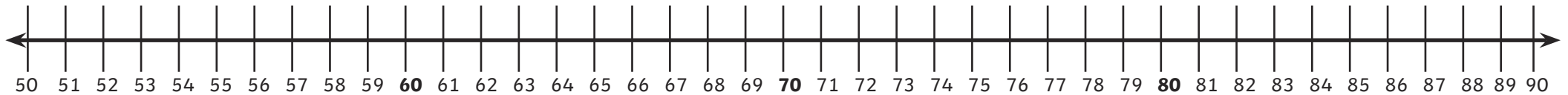
$23 + 45 =$



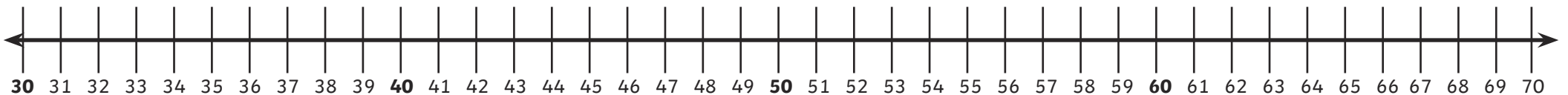
Jump Strategy Addition

Use the jump strategy to find the answer to each question.

$54 + 24 =$



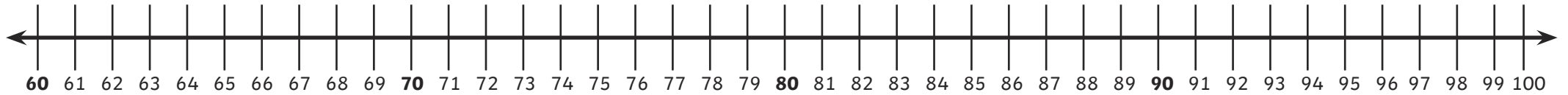
$34 + 28 =$



Jump Strategy Addition

Use the jump strategy to find the answer to each question.

$61 + 38 =$



$64 + 19 =$

