

Group 1 Writing Challenge

1a. Circle the words which need a capital letter.

on Friday, I travelled down a bumpy road.

the girl forgot her sports kit so she couldn't play football.



VF

1b. Circle the words which need a capital letter.

the best month of the year is June.

the jelly was disgusting and I did not enjoy it.



VF

2a. Correct the sentences below.

join in with the class on Monday.

your horse is very frisky.



VF

2b. Correct the sentences below.

go and get your football.

reading is fun and I read every night.



VF

3a. Choose the best word to start each sentence.

score

my

ride

_____ birthday is in March.

_____ the bike safely.



VF

3b. Choose the best word to start each sentence.

under

about

june

_____ is the sixth month.

_____ the bed is a mess.



VF

4a. Tick the correct sentence.

A. On Saturday, I visited the shops with my sister.

B. On Saturday, I visiteD the shops with my sister.

C. on Saturday, I visited the shops with my sister.



VF

4b. Tick the correct sentence.

A. my trousers didn't fit but I wore them anyway.

B. My trousers didn't fit But I wore them anyway.

C. My trousers didn't fit but I wore them anyway.



VF

Group 1 Maths Challenge

1a. Which statement is incorrect?



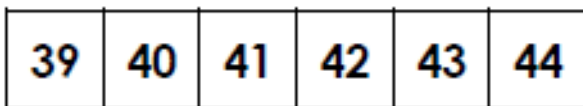
Oscar

One more and one more again than 41 is 43.



Tess

One more and one more again than 41 is 45.



R

1b. Which statement is incorrect?



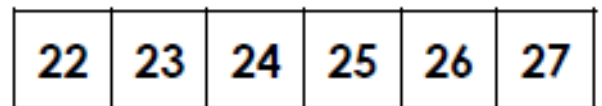
Gus

One less and one less again than 25 is 22.



Sasha

One less and one less again than 25 is 23.



R

2a. Which is the odd one out?


A.



B.

One more and one more again than 29 is 31.

C.



PS

2b. Which is the odd one out?

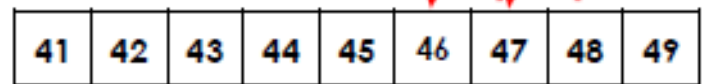
A.



B.

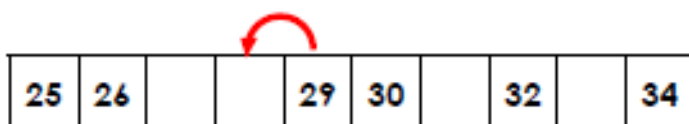
One less than 48 is 47.

C.



PS

3a. Theo has drawn a number track to show one more than twenty-nine.




Is he correct? Explain your answer.



R

3b. Isla has drawn a number track to show one less than forty.



Is she correct? Explain your answer.



R

Group 2 Writing Challenge

1a. Underline the nouns and verbs in the main clause below. Then, replace them with different nouns and verbs.

The robin flew out of the nest and didn't return for a few hours.



A

1b. Underline the nouns and verbs in the main clause below. Then, replace them with different nouns and verbs.

Dean crashed his brand new car when it snowed heavily.



A

2a. Use the words in the word bank to complete the main clauses below.

seem	does
drove	looked
flowers	room

- A. Don't walk on the _____ or you will be in trouble!
- B. We _____ around the quiet games _____ excitedly.
- C. Why _____ my cat _____ so sad after he's just eaten?



A

2b. Use the words in the word bank to complete the main clauses below.

car	room
dinosaur	hole
sprayed	coin

- A. I found a shiny _____ in my trouser pocket and I was surprised.
- B. I _____ the _____ to make it smell fresh before the guests came round.
- C. My _____ was very shiny and new so I kept it in the garage.



A

3a. Which main clause doesn't agree with the rest of the sentence? Explain why.

- A. It was a cold day today so the ice cream van was very quiet.
- B. Dad brushed his teeth very quickly.
- C. The detective didn't wear his thick coat because it was very frosty.
- D. Does your mum drive a red car now?



R

3b. Which main clause doesn't agree with the rest of the sentence? Explain why.


- A. Her hat was far too small for her head so it kept falling off.
- B. We slowly walked to school so we wouldn't be late again.
- C. The train was extremely crowded.
- D. My mum's car would not start today because it had run out of petrol.




R

Group 2 Maths Challenge

1a. Rigby the racoon wants to reach the cherries. He can only travel in the maze by finding up to 6 ascending numbers.





806	800 + thirteen	700 + 139	868
7 hundreds, 9 tens and 22 ones	83 tens and 1 one	838	664 + 200
810 + 44	nine hundred and twenty	900 + seventeen	nine hundred and three
8 hundreds, 10 tens and 21 ones	917	6 hundreds, 33 tens and 9 ones	

★ How many routes can he take?

PS

1b. Binky the rabbit wants to reach the carrot. She can only travel in the maze by finding up to 6 descending numbers.




322	300 + 15	three hundred and thirty	200 + 171
350 + 35	363	three hundred and forty	32 tens and 5 ones
2 hundreds, 10 tens and 71 ones	300 + 68	352	
200 + 186	372	1 hundred, 21 tens and 9 ones	300 + 8

★ How many routes can she take?


PS

2a. Leon and Toria are placing numbers in descending order.




500 + 163	418	400 and two ones	200 + 60 + 138	300 + ninety ones	200 + 19 tens + 1
-----------	-----	------------------	----------------	-------------------	-------------------


2b. Alessia and Kieran are placing numbers in ascending order.



500 + fifty-seven	521 + 40	568	400 + 182 ones	57 tens and 9 ones	500 + 90
-------------------	----------	-----	----------------	--------------------	----------



298	100 + 18 tens + 7 ones	210 + 43	200 + 3 tens + 19 ones	172	100 + 50
-----	------------------------	----------	------------------------	-----	----------



173	200 + 10 tens	481 + 100	300 + 39 tens + 2 ones	690 + 20	949
-----	---------------	-----------	------------------------	----------	-----

Who is correct? Prove it.



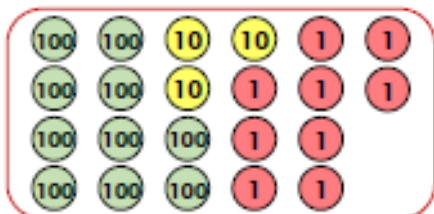
R

Who is correct? Prove it.



PS

3a. Choose between 5 and 10 place value counters each time to create six 3-digit numbers.




Write the numbers that you have created below in ascending order.



PS

3b. Choose between 5 and 10 place value counters each time to create six 3-digit numbers.



Write the numbers you have created below in descending order.



R