

Good morning Lilies

There is no work
set today.

April Fools!!!

Of course there is...

Group 1 Writing Challenge

1a. Jim has written a sentence.

Put your hand up.



The capital letter has been used correctly.

Do you agree? Explain why.



R

1b. Tom has written a sentence.

her Tent is big.



The capital letter has been used correctly.

Do you agree? Explain why.



R

2a. Order the words to make a sentence.

black dog is the

Remember to use a capital letter and full stop.



A

2b. Order the words to make a sentence.

frog a green is

Remember to use a capital letter and full stop.



A

3a. Write a sentence about the picture using the word bank to help you.



he it kick



A

3b. Write a sentence about the picture using the word bank to help you.



cat pet he



A

Group 1 Maths Challenge

1a. Circle the number that is one more than the amount shown below.



24 40 31



VF

1b. Circle the number that is one less than the amount shown below.




29 38 19



VF

2a. Find one more and one less than the number shown below.



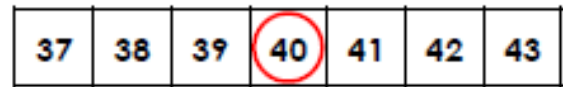
One more is .

One less is .



VF

2b. Find one more and one less than the number shown below.




One more is .

One less is .



VF

3a. Complete the sentences.



There are straws.


One more than is .

One less than is .



VF

3b. Complete the sentences.



There are straws.


One more than is .

One less than is .



VF

4a. Use the number track to complete the sentence.




38 is one less than .



VF

4b. Use the number track to complete the sentence.



40 is one more than .



VF

Group 2 Writing Challenge

1a. Underline the verb and circle the nouns in the sentence below.

Michael hurt his knee in the playground.



VF

1b. Underline the verb and circle the nouns in the sentence below.

Diane washed her hair in the bathroom.



VF

2a. Punctuate the sentence below.

linda read her favourite story



VF

2b. Punctuate the sentence below.

the car moved very slowly



VF

3a. Tick the main clause below that makes sense on its own.

A. the dog could

B. the dog barked

C. the dog was



VF

3b. Tick the main clause below that makes sense on its own.

A. the boat sank

B. the boat flew

C. the boat's mast



VF

4a. True or false? The clause below is a main clause.

Our cow ran away.



VF

4b. True or false? The clause below is a main clause.

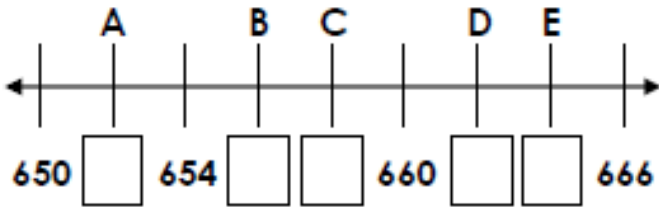
The lights went off in the museum.



VF

Group 2 Maths Challenge

1a. Fill the gaps in the number line using the numbers below.

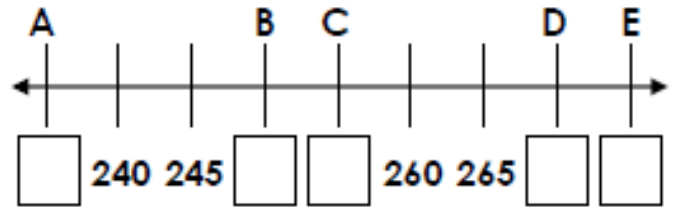


- 662
- 658
- 664
- 656
- 652



VF

1b. Fill the gaps in the number line using the numbers below.



- 270
- 250
- 255
- 235
- 275



VF

2a. Put these numbers in ascending order.

- 426
- 381
- 329
- 894
- 677

_____ ' _____ ' _____ ' _____ ' _____



VF

2b. Put these numbers in descending order.

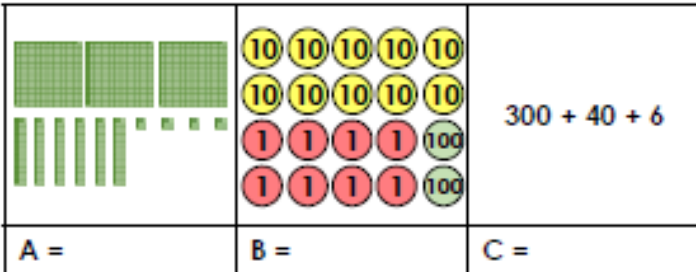
- 576
- 903
- 567
- 799
- 652

_____ ' _____ ' _____ ' _____ ' _____



VF

3a. What is each representation worth?

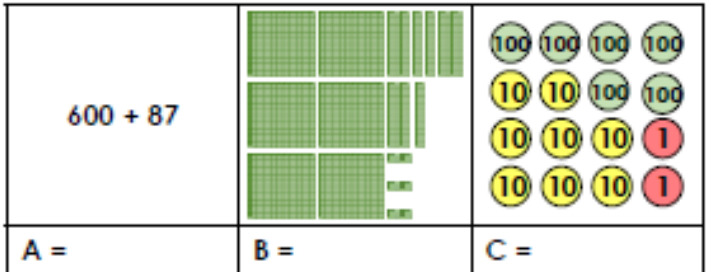


List the numbers in descending order.



VF

3b. What is each representation worth?



List the numbers in ascending order.



VF

4a. True or false? Lucie has placed these five numbers in ascending order.

670
767
676
776
777



VF

4b. True or false? Fiona has placed these five numbers in descending order.

882
849
797
658
685



VF