

Group 1

Section 1

Write the words. Circle the words that have a w sound.



Section 2

Where are they going?



Section 3


Find the hidden words in this mini word search.

o f a n d
b f g l a
u k f j d
t t u o p
s w i l l

off and dad but will

Section 4

Which tricky word has Mr Whoops been juggling with?



Section 5

Unscramble this sentence.

duck. a Sam had



Section 6

Practise writing these tricky word spellings.

to to to _____

is is is _____

the the the _____

Group 1

Section 1

The arrow has turned from the top to the side.

What sort of turn is that?



Section 2

What comes next?

14, 13, 12, ,
,

Section 3

I have 4 lollies.

I have 5 friends.

How many more lollies do I need if I give one lolly to each friend?



Section 4



Add 2 more birds.

How many birds are there altogether?

Section 5

How much money is here?



Section 6

Match the answer to the number statement.

$12 + 2 =$ 17

$10 + 0 =$ 14

$1 + 16 =$ 10

Section 7

Fill in the gap to tell us where the cat is.

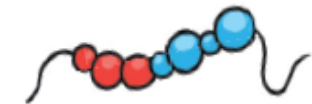


The cat is the table.

beside on top under

Section 8

Write a number statement for the picture.



$\square + \square = \square$

Group 2

Section 1

Mr Whoops has made FOUR clumsy spelling mistakes in his sentences. Can you underline them and correct them?



During my literacy lesson, I wrote a sentence that ended with a question mark. Although, I probably spelt something wrong because I always do!

Section 2

Can you rewrite this sentence and add ambitious adjectives before each noun? The swimmer glided through the water.

Section 3

Underline all the verbs in this sentence: Rebecca sat down on the chair and folded her arms. During the school holidays, she was always . She wanted to play outside.



Section 4

Decide whether each sentence is a command, a statement or a question:

Have you been at school today?

I won an award at the gymnastics competition. _____

Get to bed straight away.

Section 5

Can you think of a compound noun to match each definition?

An event that happens once a year to celebrate when you were born:

A witch might ride on one of these:

The mark you would leave with your boot in the snow: _____

A daily publication that contains stories and facts about what is happening in the world: _____

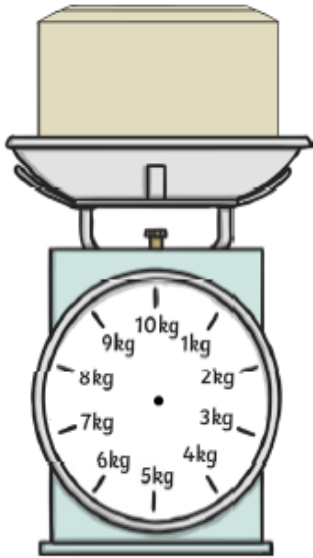
Section 6

Choose a vowel. Write the name of an animal, a country and a sport beginning with your chosen letter.

Group 2

Section 1

Draw an arrow pointing to 5kg 250g.



Section 3

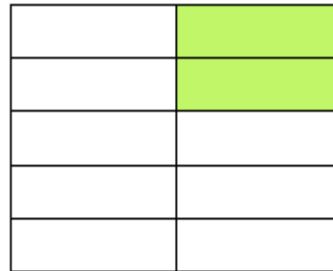
One pencil costs 28p. What do 3 pencils cost?

Section 6

$$140 + 20 + 20 = \boxed{}$$

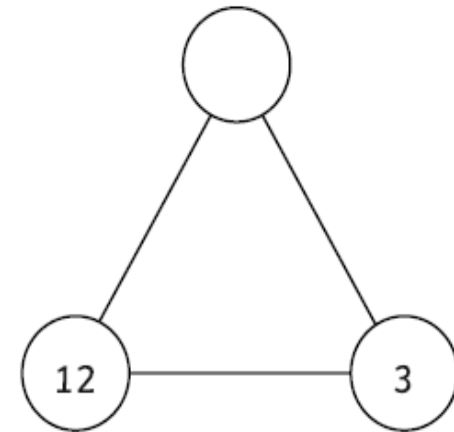
Section 4

What fraction is coloured in?



Section 7

Multiply the two bottom numbers to find the missing number.



Section 2

Complete this calculation:

$$\begin{array}{r} 89 \\ \times 2 \\ \hline \\ \hline \end{array}$$

Section 5

Measure this with your ruler. How long is it in mm?



Section 8

Start at 126.

Count on 30.

What is your answer?