

Group 1

Section 1

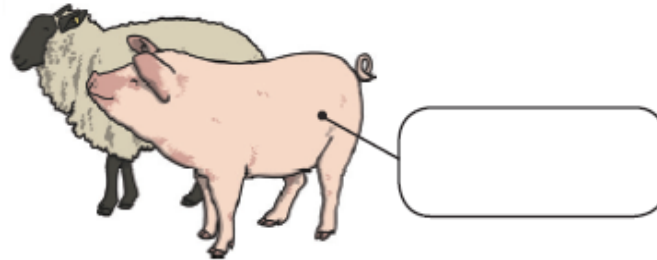
Tick the real words and cross the nonsense alien words.

win nin
 mol dot
tas sat



Section 2

Label this picture.



Section 3

Join each word to the matching picture.



hot



run



bell

Section 4

Write the first sounds.



_____ip



_____oin

Section 5

Oops! Mr Whoops has missed out the full stop. Can you add it in?



I had a can



Section 6

Circle the correct spelling.

ov

ove

of

Group 1

Section 1

Double these numbers.

8 → 6 →

Section 2

Add the coins.




Section 3

Count back. Fill in the missing numbers.



Section 4

There are 5 pink fish and 6 blue fish.
How many fish are there altogether?





Section 5

Put a circle around the odd numbers.

8 10
11 9 12

Section 6

Tick the tree with the fewest apples.



Section 7

1 less than 14 is →

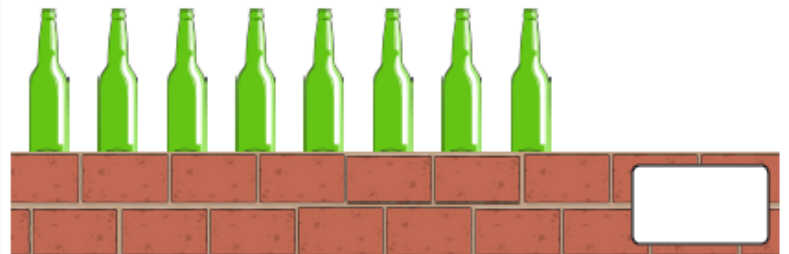
1 less than 15 is →

1 less than 17 is →

Section 8

Add 1 more bottle.

How many bottles are there now?



Group 2

Section 1

Oops! Mr Whoops has made FOUR punctuation mistakes in his sentence. Can you underline the words that should start with a capital letter?

mel and i went shopping in scotland and had such an amazing time, we went again on friday.



Section 2

Add either ? or ! to complete these sentences.

What's wrong

How did that happen

That looks really painful



Section 3

Write the plural of this word by adding the correct suffix '-s' or '-es':

five tables four bushes seven matches



one _____ one _____ one _____

Section 4

Describe this picture three full sentences.



Section 5

Read the text and answer these questions:

1. How many letters are there? _____

2. How many capital letters are there? _____

3. How many words are there? _____

4. How many sentences? _____

In March it is Bo's birthday.

Is it on a Tuesday?

Section 6

Use numbers 1-4 to put these sentences in order to make a short story.

He had breakfast, then made plans with friends to meet out on the slopes.

Ranjit got out of bed and put on his warmest clothes.

At the end of the day, he was so tired he fell asleep at dinner!

He went out, met his friends and they went skiing for hours.

Group 2

Section 1

Draw a shape with a ruler.

Make sure it has at least 2 right angles and mark them on your shape.

Section 3

Order these numbers smallest to largest:

118 810 108 138 218

--	--	--	--	--

smallest

largest

Section 4

Write the multiple of 4 that comes before these numbers:

24:

36:

48:

Section 5

Write these numbers in words:

132:

471:

211:

Section 6

There are 12 bottles of water in one pack. How many packs would there be if there were 48 bottles of water altogether? Write a number statement to show this.

Section 2

If you double 233, the answer is:

Then double the answer:

Section 7

Write 2 division facts using these numbers:

32 4 8

Section 8

Cathy is a quarter of her sister's age. Her sister is 16. How old is Cathy?