

Wednesday 13th May 2020

SPAG

1. Practise this week's spelling words.
2. Read the instructions carefully and copy the sentences in your workbook.

Put ticks in the correct boxes:

**c**

	expanded noun phrase	main clause	subordinate clause
before the sun came up			
a crunchy, red apple			

Circle the **three** determiners in  
this sentence:

**d**

**During the zoo visit, they saw many  
monkeys and an antelope.**

**Guided Reading - Comprehension questions based on Monday's report on VE day.**

**Today's comprehension questions:**

7. Name two ways people might have lost loved ones during the war in Europe.

---

---

8. Describe how people celebrated VE Day.

---

---

---

9. Why do you think the author has used an exclamation mark when commenting on the princesses walking around in the crowds in London?

---

---

## Writing – Letter writing.

**Task: Write a letter to the current Year 3 in preparation for their transition into Year 4.**

It wasn't that long ago that you were getting ready to move to another group so you are all in a great position to give some helpful advice 😊

You might include:

- What topics they might be learning.
- What YOUR favourite lessons/topics/trips/activities were and why.
- Trips to look forward to.
- How lessons might be a different compared to Y3.
- Advice on what to do if they are finding learning activities tricky.
- Advice on how to work collaboratively with other members of the class.

*When we return to school, I look forward to reading your lovely words of advice and hopefully Class 3 will enjoy reading your letters.*

## Maths

### Warm Up:

1.  $128 \div 8 =$

2.  $3 \times 6 \times 5 =$

3.  $0.27 + \underline{\hspace{2cm}} = 1$

4.  $7 \div 10 =$

5.  $\pounds 73.53 - \pounds 27.41 =$

Please continue to use the bbc bitesize link for alternative activities:

<https://www.bbc.co.uk/bitesize>

## Learning Reminders

Add and subtract 0.1 and 1 to/from numbers with 1 decimal place.

0.1	0.2	0.3	0.4	0.5	0.6	0.7	0.8	0.9	1

The numbers in this grid go up in steps of **0.1** instead of steps of 1.

What number will be at the end of the row?

And the end of the next row?

That's **one** at the end ... NOT *zero point ten!*

## Learning Reminders

Add and subtract 0.1 and 1 to/from numbers with 1 decimal place.

0.1	0.2	0.3	0.4	0.5	0.6	0.7	0.8	0.9	1
1.1	1.2	1.3	1.4	1.5	1.6	1.7	1.8	1.9	2
									3
									4
									5
									6
									7
									8
									9
									10

On a 1–100 grid, when we move down the grid we add 10. Going down, what do we add on this grid?

## Learning reminders

Add and subtract 0.1 and 1 to/from numbers with 1 decimal place.

0.1	0.2	0.3	0.4	0.5	0.6	0.7	0.8	0.9	1
1.1	1.2	1.3	1.4	1.5	1.6	1.7	1.8	1.9	2
			2.4	2.5	2.6				3
				3.5					4
									5
									6
									7
									8
									9
									10

What numbers are to the right, left and below 2.5?

$$2.5 + 0.1 = 2.6$$

$$2.5 - 0.1 = 2.4$$

$$2.5 + 1 = 3.5$$






















What numbers would go in the highlighted squares? How can you find them?

Check the answers below...

## Practice Sheet Mild

### Decimals practice

What numbers belong in each of the ringed squares?

0.1	0.2	0.3	0.4	0.5	0.6	0.7	0.8	0.9	1
1.1	1.2	1.3	1.4	1.5	1.6	1.7	1.8	1.9	2
2.1	2.2	2.3	2.4	2.5					
									
									
									
									
									
									
									



## Check your understanding: Questions

Complete each sequence of numbers.

3.7 3.8 3.9

1.3 1.2  1  0.8

0.8 1.8   4.8

9.3 9.2    8.8

10.6 9.6

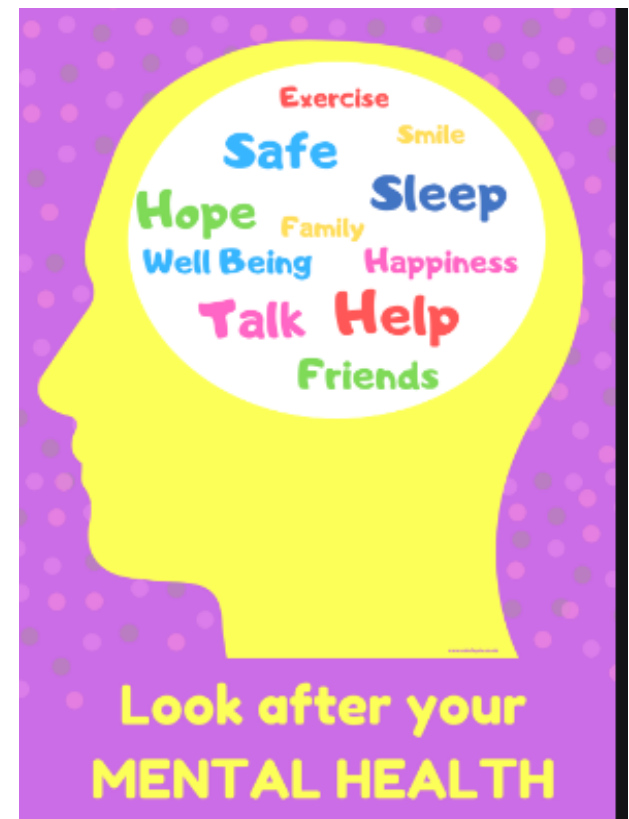
I hope everyone is having a great week so far 😊

If you are like me and are beginning to really miss visiting some of the great places that London has to offer, check out this website that shares what the animals at London Zoo have been up to while we have been staying at home.

[https://www.zsl.org/zsl-london-zoo/virtual-londonzoo?gclid=EAIaIQobChMI\\_5iXiKWf6QIVVuvvtCh3GiwZQEAAAYASAAEgJhvfD\\_BwE&gclidsrc=aw.ds](https://www.zsl.org/zsl-london-zoo/virtual-londonzoo?gclid=EAIaIQobChMI_5iXiKWf6QIVVuvvtCh3GiwZQEAAAYASAAEgJhvfD_BwE&gclidsrc=aw.ds)

If you have completed all your work today, make sure to take a break. You could

- read a book
- go for a walk outside
- help your parents with some chores
- do some baking
- listen to some music
- call a friend
- play a board game



## Reading comprehension Answers.

7. Name two ways people might have lost loved ones during the war in Europe.  
**Accept any two: fighting abroad, caught by the enemy or died in air raids attacks.**
8. Describe how people celebrated VE Day.  
**People celebrated VE day by decorating the streets with banners, bunting and ribbons, and by having street parties, and sharing food.**
9. Why do you think the author has used an exclamation mark when commenting on the princesses walking around in the crowds in London?  
**Answers will vary.**

## Maths WarmUp answers:

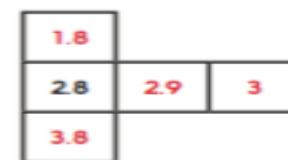
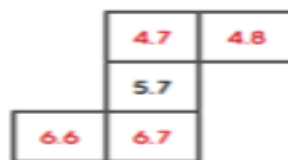
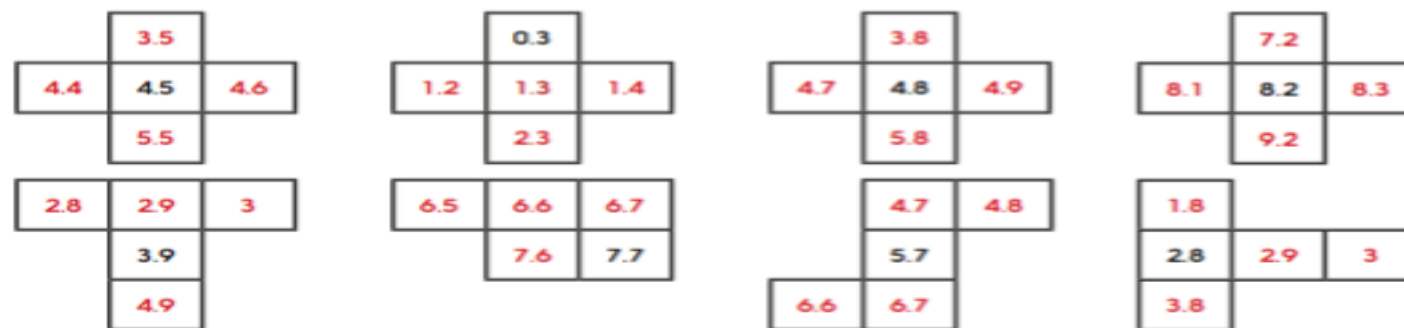
- 1) 16
- 2) 90
- 3) 0.73
- 4) 0.7
- 5) 46.12

## Practice Sheet Answers

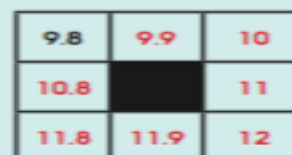
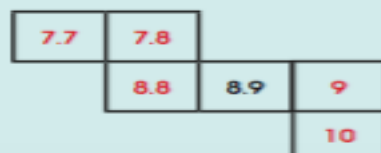
### Decimals practice (Mild)

2.8,  
3.2, 3.5  
4.2, 4.4, 4.5, 5  
5.5, 5.9, 6  
6.5  
7.3, 7.5, 7.6, 7.7, 7.8  
8.5  
9.1, 9.2, 9.3, 9.5

### Decimals practice (Hot)



### Challenge



Check your understanding:

### Answers

Complete each sequence of numbers.

3.7 3.8 3.9 4 4.1

1.3 1.2 1.1 1 0.9 0.8

0.8 1.8 2.8 3.8 4.8 5.8

9.3 9.2 9.1 9 8.9 8.8

12.6 11.6 10.6 9.6 8.6