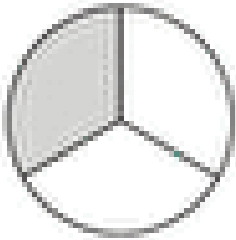
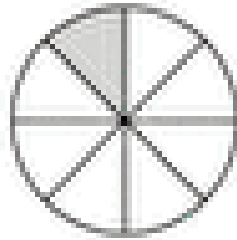


Maths 3 – Fractions

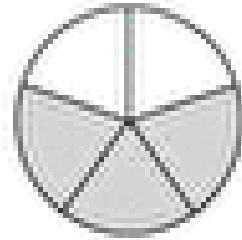
Write the fraction of the shaded part in the boxes below. I've done the first one for you as a reminder.



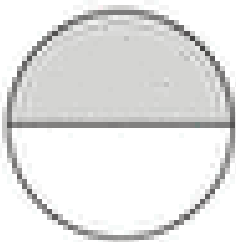
$$\frac{\boxed{1}}{\boxed{3}}$$



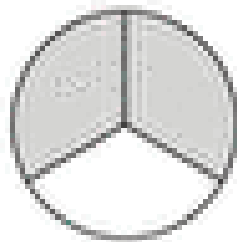
$$\frac{\boxed{}}{\boxed{}}$$



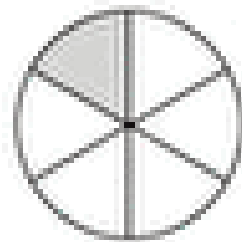
$$\frac{\boxed{}}{\boxed{}}$$



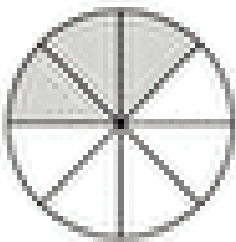
$$\frac{\boxed{}}{\boxed{}}$$



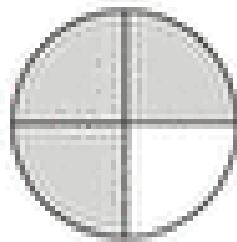
$$\frac{\boxed{}}{\boxed{}}$$



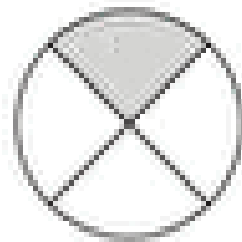
$$\frac{\boxed{}}{\boxed{}}$$



$$\frac{\boxed{}}{\boxed{}}$$



$$\frac{\boxed{}}{\boxed{}}$$



$$\frac{\boxed{}}{\boxed{}}$$