
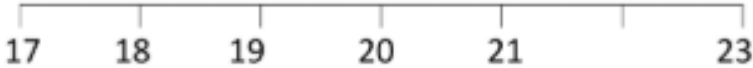





## Maths questions

1)	$3 + 9$	
2)	Write down the next number: 18 19 20 21 22 23 24 _____	
3)	How many sides? 	
4)	$11 - 5$	
5)	Which number is missing from the number line? 	
6)	How many fish? 	
7)	What number comes <b>after</b> 26?	
8)	How much money? 	p
9)	I have 10 bananas. I eat 3 of them. How many are left?	
10)	Sally has 5 cakes. She makes 2 more. How many does she have now?	
11)	Draw the next shape in the sequence. 	
12)	Which number comes <b>before</b> 18?	