



1-



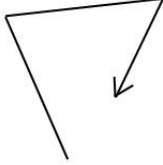
How many left turns ?
 A) 3
 B) 2
 C) 1

2-




How many left turns ?
 A) 6
 B) 5
 C) 4

3-



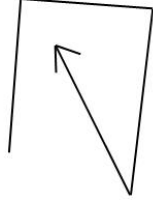
How many left turns ?
 A) 0
 B) 1
 C) 2

4-



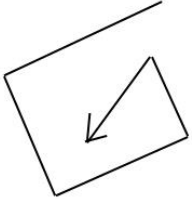
How many left turns ?
 A) 2
 B) 3
 C) 4

5-



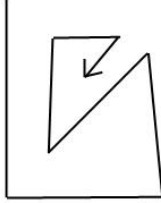
How many right turns ?
 A) 3
 B) 4
 C) 5

6-



How many left turns ?
 A) 2
 B) 3
 C) 4

7-



How many right turns ?
 A) 3
 B) 4
 C) 5

Spatial Orientation VLR - 10



B - C - A - B - A - C - A