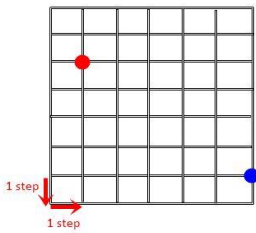



1 -



How many steps  
is the shortest way from  
red to blue ?

- A) 7
- B) 9
- C) 11

2 -

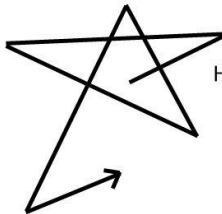


Find The Missing Arrow

?

- A)
- B)
- C)

3 -



How Many Left Turns ?

- A) 4
- B) 5
- C) 6

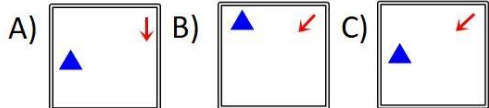
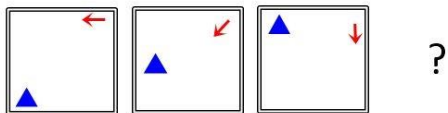
4 -

72 - 69 - 65 - 60 - ?

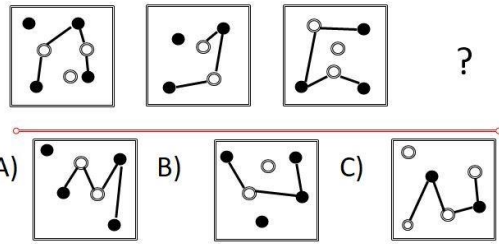


- A) 58
- B) 54
- C) 52

5 -



6 -



Mixed Questions test - 6



B - A - B - B - C - C