

Christmas 1

Match the name of the winter holiday with its celebration

	African harvest festival
Solstice	day after christmas; gifts given to service workers
Christmas	8 day Jewish festival of lights
Chanukah	sun is greatest distance from equator
Kwanzaa	Christian celebration of the birth of Jesus
Boxing Day	


What is the circumference of the earth in miles?

If Santa flew at 60 mph, how many hours would it take him to fly all the way around the earth without stopping?

If you convert the hours to days, how many days would it take Santa to fly around the earth?

What if he went 100 miles per hour? 1000 mph?

What is inside this ornament?

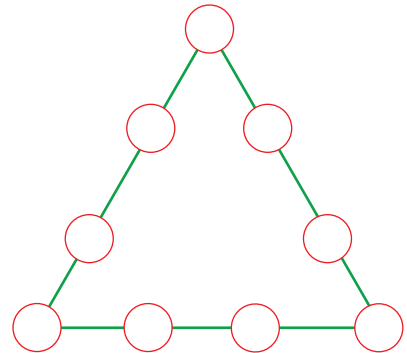


Draw the earth and sun as they are positioned for the winter solstice.


What did the Gingerbread Man put on his bed?

_____ (get the answer tomorrow!)

Place each digit from 1- 9 around the 3 sides of the christmas tree so that each side totals the same amount. Use each number only once.



decorate this gingerbread house



Unscramble these holiday words

nkgsctot _____

edrnerie _____

eret _____




oospwhkr _____

Mrs. Claus is making gingerbread cookies for the elves. Help her figure out how much of each ingredient will she need for a double and for a triple batch.



ingredient	1 batch	2 batches	3 batches
flour	3 c.		
brown sugar	3/4 c.		
butter	6 tbsp.		
baking soda	3/4 tsp.		
baking powder	1 1/2 tsp.		
molasses	1/2 c.		
eggs	1		
ginger	1/4 tsp.		
vanilla	2 tsp.		
cinnamon	1 3/4 tsp.		

Decorate these cookies.



What's Santa's favorite sandwich?

(get the answer tomorrow!)

How many days are left in the year?

In what story will you find Ebenezer Scrooge?

Draw lines to connect the rhyming words

Circle the verbs in red

Circle the pronouns in green

Circle the adjectives in yellow

Circle the nouns in blue.

Frosty the snowman was a jolly happy soul,
With a corncob pipe and a button nose
and two eyes made out of coal.

Frosty the snowman is a fairy tale, they say,
He was made of snow but the children
know how he came to life one day.

There must have been some magic in that
old silk hat they found.

For when they placed it on his head
he began to dance around.

Draw a scene around this tree



This penguin goes fishing and catches 3 fish the first day, 8 the second, and 13 fish the third day. If this pattern continues, how many fish will it catch on the 7th day?

Christmas 3

Add capital letters and punctuation to these sentences from A Christmas Carol. Each _ indicates one missing punctuation mark. Check your answers by looking at a copy of the story.

a merry christmas bob_ _ said scrooge_ with an earnestness that could not be mistaken_ as he clapped him on the back_ _ a merrier christmas_ bob_ my good fellow_ than I have given you for many a year_ i_ ll raise your salary_ and endeavour to assist your struggling family_ and we will discuss your affairs this very afternoon over a christmas bowl of smoking bishop_ bob_ make up the fires_ and buy another coal-scuttle before you dot another i_ bob cratchit_ _

Everything for your holiday dinner needs to be done at 5:00. Below, you will see each dish and the required cooking time. Figure out what time you will need to start each dish so everything will be done on time.

dish	cook time	start time
turkey	4 hours	
potatoes	35 minutes	
green beans	20 minutes	
bread	2 hours	
cranberries	45 minutes	

Match the beginnings & endings of these words

- | | |
|------|-------|
| mist | mney |
| sle | sent |
| chi | letoe |
| wre | igh |
| pre | ath |

Put your name on this stocking and give it a great design.




What's the difference between the Christmas alphabet and the ordinary alphabet?

(find out tomorrow!)

25% of elves like making wooden toys
 10% of elves prefer taking care of the reindeer
 10% of elves like assembling electronic gadgets
 5% of elves like sewing clothes and dolls
 50% of elves prefer to eat cookies and sip cocoa
 Show this information on a pie graph.

Finish this scene



Christmas 4

How do you say "Merry Christmas" in each language?


French _____

German _____

Italian _____

Spanish _____

Draw a scene inside this snow globe



Design a tessellation wrapping paper for this gift.



What does Auld Lang Syne mean?

What's the difference between Santa's reindeer and a knight?

(get the answer below!)

Help Santa by drawing a map of one of the areas he has to deliver gifts. Follow these directions and draw the map for him.

Icicle Interstate is parallel to Rudolph Road and Holly Jolly Highway.

Snowflake Street is diagonal to all 3 and deadends at Holly Highway.

Elf Avenue is perpendicular to Icicle Interstate, Rudolph Rd, and Holly Jolly Hwy.

Mistletoe Mall is bordered by Rudolph Road, Elf Avenue and Icicle Interstate.

Draw the map and label everything. Add any extra details you would like.

You have \$275.00 and want to use it to buy gifts for 8 people.

What is your budget for each person if you divide it equally.



If a reindeer can go 2060 miles in 5 hours how fast is it flying?