

Think of something...

That makes a loud noise:

That is used in many sports


That will never get thrown away:

That is used for hearing:

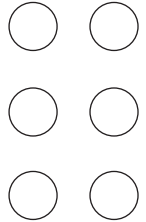
That makes life easier:

Write your first, middle, and last name in your very best penmanship.

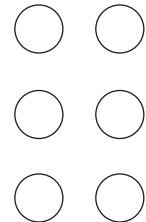
Create some art for this gallery:



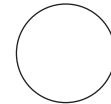
These are warm colors:



These are cool colors:



I feel



The weather right now:

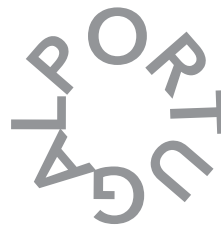


temperature: _____

Complete this guest check. Fill in the correct amounts in the gray blocks (you can make up a tip amount!)

ZURSTY S FLYSCREAM SHOP					
GUEST CHECK					
Server	Check #	Table	Guests		
Toad	12	6	2		
Qty: 2	Flyscream Shake		3	20	
1	1/4 lb. Wormburger		5	25	
1	French Flies		2	50	
1	Stinkbug Wrap		4	75	
1	Loaded Gnatchos		5	25	
			Pre-tax total:		
			10 % tax:		
			Tip:		
			Total:		

Can you figure out the names of these European countries?



Which words make up these contractions in each of these sentences?

1. You've done it again. _____
2. I'll go and see what is wrong. _____
3. Elmer can't go until March. _____
4. We aren't having dinner. _____
5. She's a good friend. _____
6. I'd eat it if it wasn't rotten. _____

Draw or describe:

Water as a solid

Water as a liquid

Water as a gas


Write these fractions as decimals:

$\frac{3}{4}$ $\frac{1}{10}$ $\frac{2}{5}$ $\frac{4}{16}$

Write these numbers as fractions:

.25 6.002 .5 4.12

Give this old car a great paint job.



Create a new design for stop & yield signs on these poles.



Write your name in lights.


My favorite letter:

The weather right now:




temperature:


Draw in the hands to show what time you:



wake up



eat lunch



go to bed

Capitalize common nouns when they are **part of a proper noun** such as Red River, or Aunt Daisy.

Capitalize each word that needs a capital letter.

1. i crossed the rocky mountains in roller skates.
2. did you go to bob's cooking school?
3. uncle fred is coming from antarctica tomorrow evening.
4. have you been to sweet treats shop?
5. my cousin goes to lincoln middle school.

Estimate the value of:

$$490 + 993 =$$

$$3721 \times 4 =$$

$$515 - 272 =$$

Make the letters of your name wiggle.



Draw all the things you use to keep your teeth healthy.

The weather right now:



temperature:

Find the missing piece of each analogy:

Inch is to ruler as degree is to _____.

Elephant is to 4 as spider is to _____.

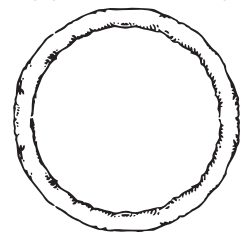
Person is to hand as tiger is to _____.

_____ is to milk as chicken is to egg.

Day is to _____ as night is to moon.

- is to subtraction as x is to _____.


Add toppings to this pizza:




Which continent is this?




Make a design in each box using only the given type of line.




straight lines




dotted lines




crosshatch lines




curved lines




thick lines



squiggly lines



zigzag lines

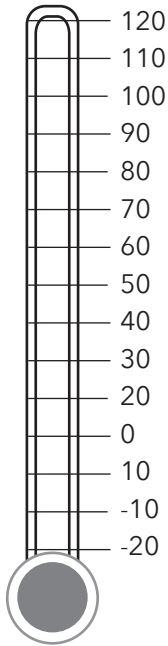


thin lines

Underline the verb phrases in each sentence.

1. I can see through the window.
2. We will go to the bank on Tuesday.
3. The snow was falling all night.
4. She must have shut the door.
5. The sun should be shining tomorrow.

Draw your hand holding a pencil.



Round each number to the nearest 10:

286 _____

17 _____

545 _____

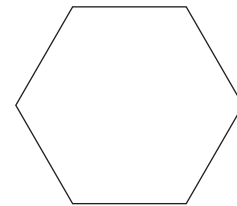
Round each number to the nearest 100:

286 _____

17 _____

545 _____

Write your name around or in this hexagon.



Unscramble these planet names.

RAMS _____

SEVUN _____

HEART _____

RANTUS _____

Color in the moons to show each phase:



New Moon



Waxing Crescent



First Quarter



Waxing Gibbous



Full Moon



Waning Gibbous



Last Quarter



Waning Crescent

Arrange these numbers in increasing order:

53,133 54,313 35,133 53,312

What is your favorite book?